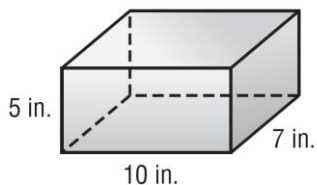


Lesson 4

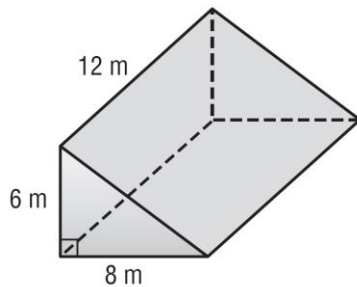
Volume of Prisms

Find the volume of each prism. Round to the nearest tenth if necessary.

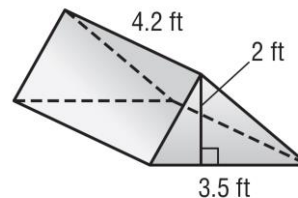
1.



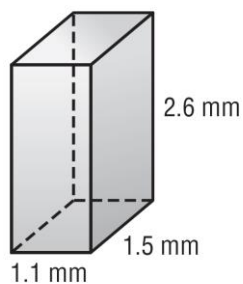
2.



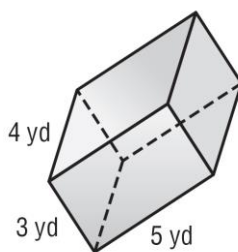
3.



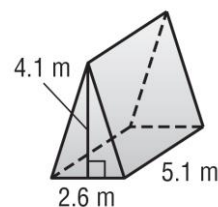
4.



5.



6.

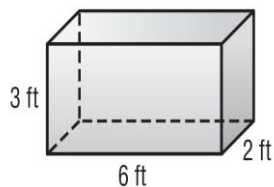


Lesson 6

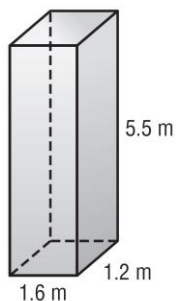
Surface Area of Prisms

Find the surface area of each prism. Round to the nearest tenth if necessary.

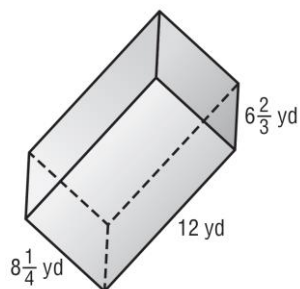
1.



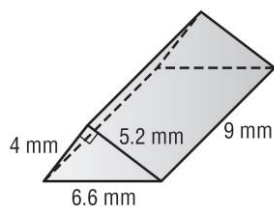
2.



3.



4.



5.

